



Name: _____

$$\begin{array}{r} 86365 \\ + 77065 \\ \hline \end{array}$$

$$\begin{array}{r} 12016 \\ + 75387 \\ \hline \end{array}$$



$$\begin{array}{r} 72475 \\ + 53981 \\ \hline \end{array}$$

$$\begin{array}{r} 28028 \\ + 29571 \\ \hline \end{array}$$

$$\begin{array}{r} 45765 \\ + 19086 \\ \hline \end{array}$$


$$\begin{array}{r} 50294 \\ + 52532 \\ \hline \end{array}$$

$$\begin{array}{r} 90109 \\ + 18879 \\ \hline \end{array}$$

$$\begin{array}{r} 34940 \\ + 79015 \\ \hline \end{array}$$

$$\begin{array}{r} 91892 \\ + 62331 \\ \hline \end{array}$$


$$\begin{array}{r} 50681 \\ + 66004 \\ \hline \end{array}$$



Name: _____

$$\begin{array}{r} 49565 \\ - 11684 \\ \hline \end{array}$$

$$\begin{array}{r} 15503 \\ - 12895 \\ \hline \end{array}$$



$$\begin{array}{r} 56044 \\ - 28016 \\ \hline \end{array}$$

$$\begin{array}{r} 55846 \\ - 28844 \\ \hline \end{array}$$

$$\begin{array}{r} 92266 \\ - 39125 \\ \hline \end{array}$$

$$\begin{array}{r} 74044 \\ - 22170 \\ \hline \end{array}$$

$$\begin{array}{r} 81019 \\ - 17517 \\ \hline \end{array}$$

$$\begin{array}{r} 23464 \\ - 20218 \\ \hline \end{array}$$

$$\begin{array}{r} 20268 \\ - 16678 \\ \hline \end{array}$$

$$\begin{array}{r} 44444 \\ - 41801 \\ \hline \end{array}$$

0 1 2 3 4 5 6 7 8 9


Name: _____

KidZone.ws
Word Problem

Derek from ABC Potato farm is preparing to plant a crop of potatoes this spring. The field will have 379 rows of potatoes with 169 plants in each row. Derek estimates that they will plant the entire field in 13 hours with their planting machine.

How many potato plants are there in all? _____

How many potatoes will be planted each hour? _____

SHOW YOUR WORK:



Name: _____

Mary is going to the market to sell some of her garden vegetables. She would like to sell her basket of tomatoes for \$13.79 and her box of cucumbers for \$12.58. She also has a giant pumpkin that she hopes to sell for \$29.19. How much money does Mary hope to earn by selling her vegetables.

Write the math equation: _____

How much does Mary hope to earn? _____

SHOW YOUR WORK:

