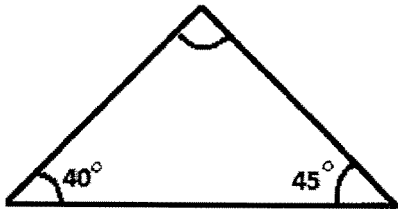


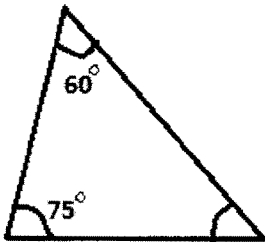
Student Name: _____

Score: _____

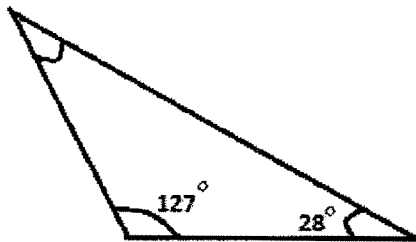
Find the missing angle of triangles



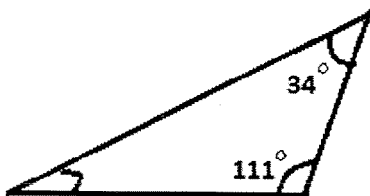
Missing Angle = _____



Missing Angle = _____



Missing Angle = _____



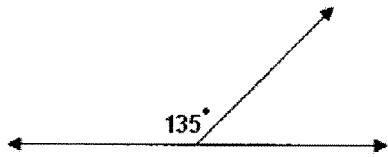
Missing Angle = _____

Student Name: _____

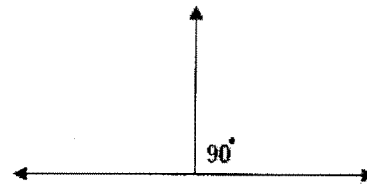
Score: _____

Supplementary Angles

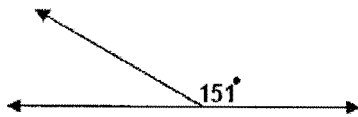
Find the missing angles in the following supplementary angles:



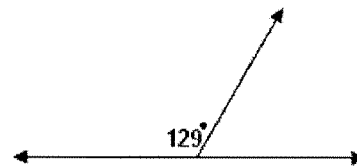
Answer: _____



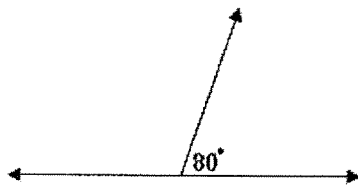
Answer: _____




Answer: _____



Answer: _____



Answer: _____



Answer: _____