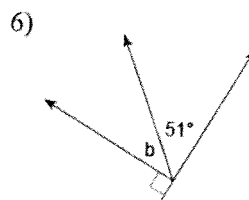
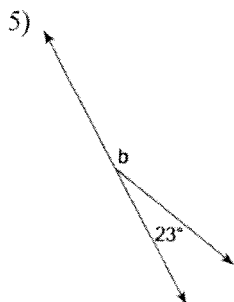
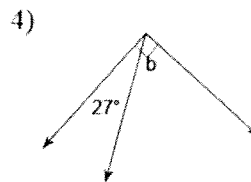
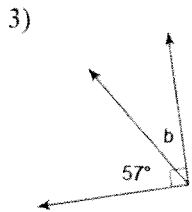
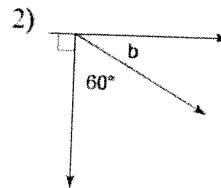
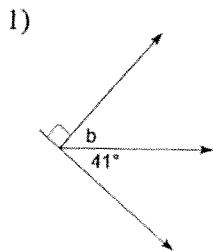
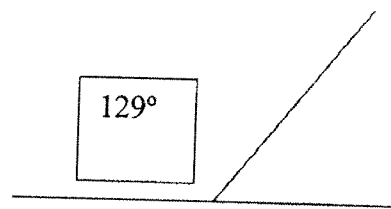
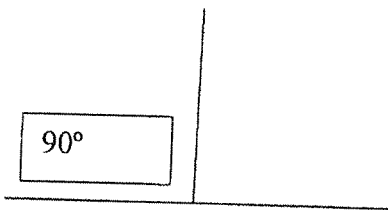
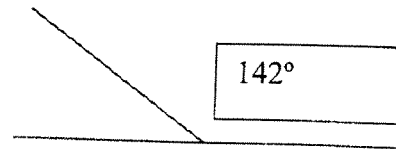
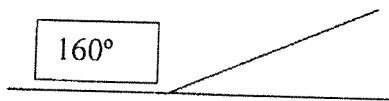
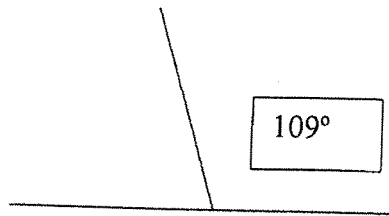
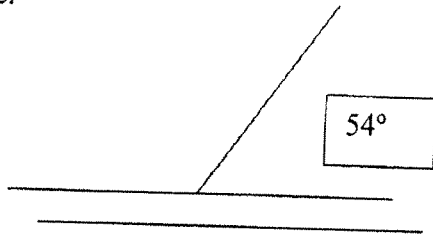


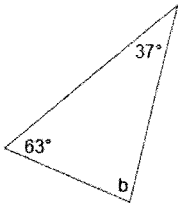
name: _____

Review

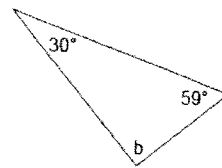
Remember, a straight angle is equal to 180° . Use the labeled angle to figure out the missing angle.



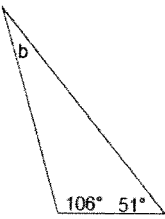
59)



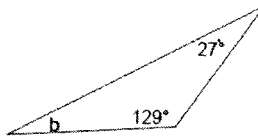
60)



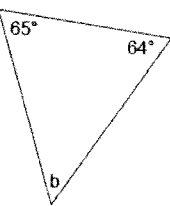
61)



62)



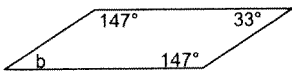
63)



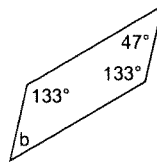
64)



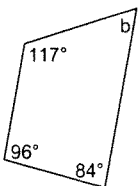
43)




44)



45)



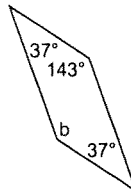
46)



47)



48)



$$\begin{array}{r} 2.14 \\ \times 3 \\ \hline \end{array}$$

$$\begin{array}{r} 31.5 \\ \times 0.6 \\ \hline \end{array}$$

$$\begin{array}{r} .180 \\ \times 21 \\ \hline \end{array}$$

$$5 \overline{)3.7}$$

$$4 \overline{)4.2}$$

$$5 \overline{)1.75}$$

8

Notes